

miStAkEs
are proof
that you are
TRYING

Good Morning Year 3

Let's start our day with yoga. Start your day by completing some Cosmic Kids yoga. Find a yoga video that you would like to do today.

<https://www.youtube.com/user/CosmicKidsYoga>

IT'S
okay
to
not know,
but it's
not okay
to
not try.

I always enjoy yoga, it makes me feel calm and ready to do some super work. Do you feel the same too?

The second lesson is maths.

Today, you are going to be multiplying by 8.

Before we start, let's practise our 8 times tables.

Write them down...can you spot a pattern with the numbers? The first one I spotted, was in the ones column. Can you spot it too?

<https://www.bbc.co.uk/teach/superheroes/ks2-maths-the-8-times-table-with-filbert-fox/z4mrhbk>

Choose your chilli challenge below.

1a. Use the information given to answer the questions below.



$$8 + 8 + 8 = \square$$

$$\square \times 8 = 24$$



VF

2a. Use the image below to solve the calculation.



$$8 \times 5 = \square$$



VF

3a. True or false?

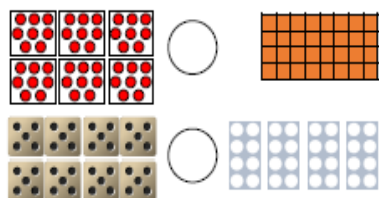


$$8 \times 6 = 42$$



VF

4a. Use $<$, $>$ or $=$ to complete the inequality statements below.



VF

5a. Use the information given to answer the questions below.

$$4 + 4 + 4 + 4 + 4 + 4 + 4 + 4 + 4 + 4 + 4 + 4 = 48$$

$$8 + 8 + 8 + 8 + 8 + 8 = \square$$

$$12 \times 4 = 48$$

$$\square \times 8 = 48$$



VF

6a. Use the image below to solve the calculation.




$$8 \times 7 = \square$$



VF

7a. True or false?

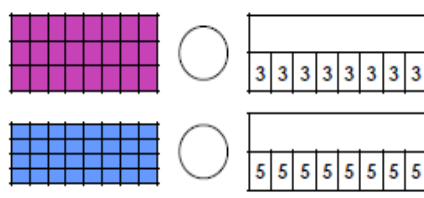


$$8 \times 8 = 54$$



VF

8a. Use $<$, $>$ or $=$ to complete the inequality statements below.



VF

9a. Use the information given to answer the questions below.

$$12 \times 4 = 48$$

$$12 \times 4 \times \square = 96$$

$$\square \times 8 = 96$$



VF

10a. Draw an array in the box to represent the calculation below.



$$8 \times 11 = \square$$



VF

11a. True or false?

$$4 \times 8 = 2 \times 2 \times 8$$



VF

12a. Use $<$, $>$ or $=$ to complete the inequality statements below.

$$8 \times 8 \quad \bigcirc \quad 4 \times 2 \times 9$$

$$3 \times 4 \times 2 \quad \bigcirc \quad 5 \times 8$$



VF

Challenge – Mrs Martin believes that $8 \times 0 = 8$ however Mrs Patel argues that $8 \times 0 = 0$.

Who is correct? How do you know they are correct?



Our next lesson is English.

Professor punctuation has forgotten how to punctuate speech correctly.

Rewrite the sentences below with the correct punctuation.

- A. **Why are your shoes not on the rack." William's mum asked him**
- B. **Petra said "Strawberries are my favourite fruit.**
- C. **Indie asked Mark, where is the zoo?**
- D. **"Karl, come and eat the pancakes Dad requested quietly.**

He has now lost some words in his sentences. Can you help him add the correct word to the sentences below? Use the word bank to help you.

A. "Where is the fruit and vegetables aisle. The woman at the supermarket _____ angrily.

B. "When answering questions about a text it is important to read the question and text, before you ask for help?" Marcel _____.

questioned

mumbled

clarified



Professor punctuation's challenge – Klaus is using the checklist to check if he has used all the correct writing features for speech. Has he completed it correctly? If not explain the mistake Klaus has made.

**“What a wonderful day at the beach”
Did you have fun, ashley?” Sophia
enquired.
“Yes, I did. My favourite part was
when we buried dad in the sand.
ashley replied excitedly.**

Feature	Tick if included
Capital letters	✓
Speech marks	✓
Comma before speech	✓
Punctuation to close speech	✓

Has he completed the checklist correctly?
Explain how you know.

The final lesson is ICT.

Sign onto purple mash and click on the topics section.

Scroll down and find the stone age section.

purple mash

Home 2Dos Work Data Sharing Teachers Admin Help Alerts

Home/Topics

Search

Letter Writing Let's Debate Light And Dark Lists and Captions Materials The Maya Minibeasts Myths and Legends Nature Number

Geometry/Shape Persuasive Writing Pirates Plants Poetry Polar Regions Profile Writing The Rainforest Report Writing Reviews

Rocks and Soil Romans School Seasons Seaside Sound Space Spanish Armada Sport **Stone Age**

Superheroes The Great Famine The Current Royal Family Old and New Toys Toys and Games Transition to Secondary Tudors Traditional Tales Transport Victorians

Scroll down and click on the paintings section.

purple mash

Home 2Dos Work Data Sharing Teachers Admin Help Alerts

Home/Topics/Stone Age

Serial Mash BOOK and Resources.

The Settlers

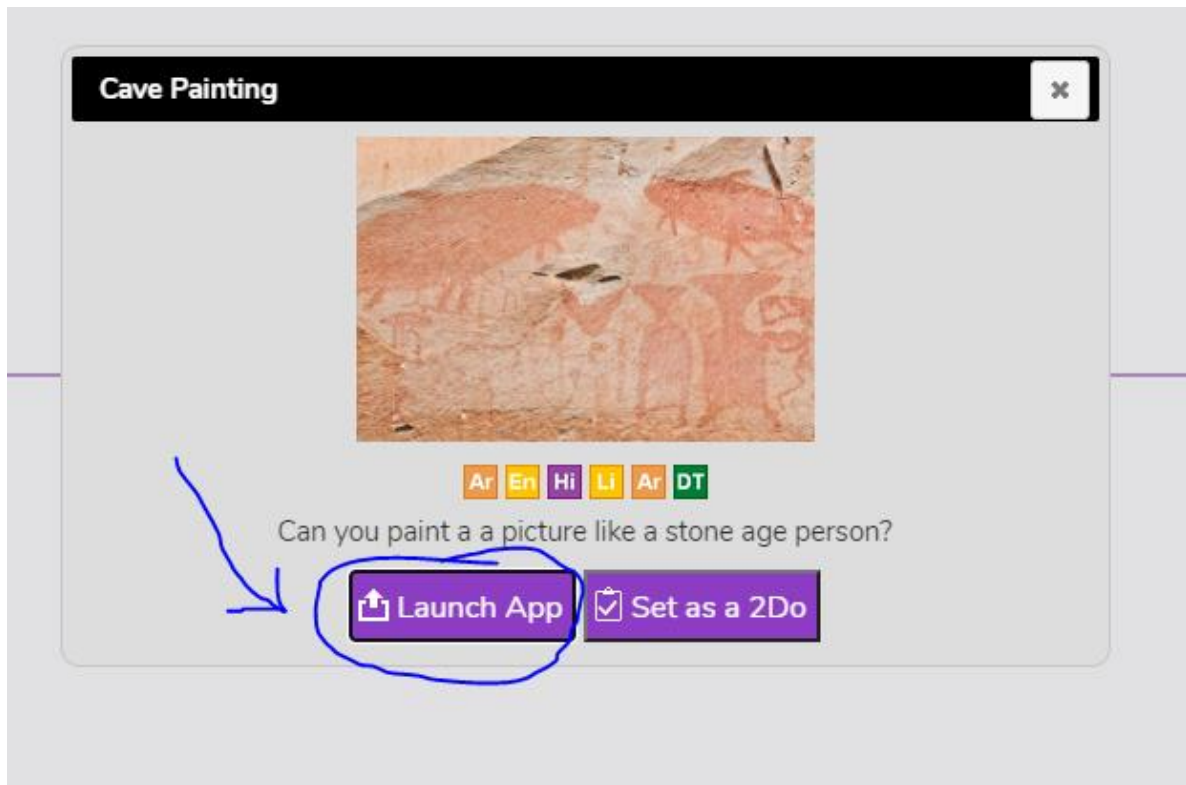
Settlers

Painting:

Cave Painting

Mashcams:

Click on Launch App



On this app I would like you to create a cave painting that could have been found in the stone age.

Here are some examples of cave paintings.



Super work again Class 3! What was your favourite activity today? I most enjoyed the work on Purple Mash. I found the English challenge tricky though. Can anyone email me their answers?

Remember to have time to yourself and to do something you enjoy. Also, don't forget to enjoy a good book!

Mrs Martin



Maths answers

1a. 24, 3 2a. 40 3a. False. 48 4a. >, =	5a. 48, 6 6a. 56 7a. False. 64 8a. =, <	9a. 2, 12 10a. Accept any array that accurately represents 88. 11a. True 12a. <, <
--	--	---

English answers

1. The sentences are as follows: A: “Why are your shoes not on the rack?” William’s mum asked him. B: Petra said, “Strawberries are my favourite fruit.” C: Indie asked Mark, “Where is the zoo?” D: “Karl, come and eat the pancakes,” Dad requested quietly.

5. A: “Where is the fruit and vegetables aisle?” the woman at the supermarket questioned angrily. B: “When answering questions about a text it is important to read the question and text, before you ask for help,” Marcel clarified.

9. No, Klaus has not completed the checklist correctly as the sentence should be written as follows: “What a wonderful day at the beach! Did you have fun, Ashley?” Sophia enquired.
“Yes, I did. My favourite part was when we buried dad in the sand,” Ashley replied excitedly.