



## Good Morning Year 3

Hope you are all well! Did you have a good day yesterday? I hope that you all worked hard on your tasks. Yesterday, I gave out 50 Dojos for fantastic work...can we beat that today? Keep sending me pictures of your work.



Let's start our day off with a dance. Today, you can choose if you want to dance with Oti or dance with just dance. I am going to join Oti today. 😊

Next up, we have maths.

Today, we are going to be dividing by 4. Remember we can divide by sharing or grouping.

### Sharing

Lucy has 12 sweets and shares them between 3 of her friends. How many sweets does each friend get?



**We would say:**

12 sweets shared between 3 people gives 4 sweets each.

The answer lies in the value of each equal share.

### Grouping

Lucy has 12 sweets. She wants to put them into bags of 3. How many bags will she have?



**We would say:**

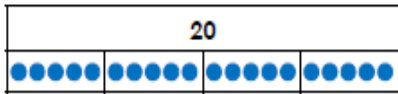
12 sweets put into bags (groups) of 3 gives 4 bags (groups).

The answer lies in the number of equal groups.

Choose your chilli challenge below.

1a. True or false? The calculation below is correct.

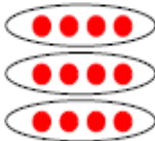
$$20 \div 4 = 6$$



VF

2a. Circle the correct answer.

$$12 \div 4 = ?$$



2

3

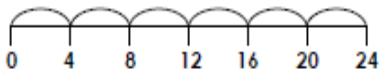
4



VF

3a. Use the number line to solve the calculation.

$$24 \div 4 = ?$$



VF

4a. 4 children share 8 marbles equally.



Complete the calculation to show how many each child receives.

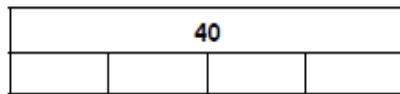
$$\square \div \square = \square$$



VF

5a. True or false? The calculation below is correct.

$$40 \div 4 = 9$$



VF

6a. Circle the correct answer.

$$24 \div 4 = ?$$



5

6

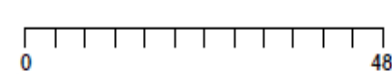
7



VF

7a. Use the number line to solve the calculation.

$$48 \div 4 = ?$$



VF

8a. 4 children share 12 cubes equally.



Complete the calculation to show how many each child receives.


$$\square \div \square = \square$$



VF

9a. True or false? The calculation below is correct. Complete the bar model to help you.

$$48 \div 4 = 12$$



VF

10a. Circle the correct answer.

$$32 \div 4 = ?$$

9

8


7



VF

11a. Use the number line to solve the calculation.

$$28 \div 4 = ?$$



VF

12a. A mechanic has 16 new tyres. How many cars can he fit with a full set of new tyres?

Complete the calculation to show how many cars will get a new set of tyres.


$$\square \div \square = \square$$



VF

## Challenge

5a. Write a word story and the division calculation to match the image below.



Our next lesson is English.

Can you remember what our focus is?

Yes! Synonyms. What is a synonym...email me your answer for 3 Dojos.

Can you find all the synonyms for walk in the word search? There are 13 synonyms to find in total.

# SYNONYM WORD SEARCH



This word search contains 13 synonyms for the boring word 'walk'. Can you find them all? You can use a **thesaurus** to help you search for any unfamiliar words.

T	R	A	I	P	S	E	I	O	T	R	F	M
Y	O	N	K	R	A	M	B	L	E	S	D	E
H	A	B	L	T	U	Z	Y	L	K	F	S	A
F	M	G	O	N	N	X	J	D	N	I	P	N
A	I	D	V	B	T	H	K	A	B	C	V	D
Q	T	S	C	V	E	U	P	R	A	N	C	E
U	Y	T	E	E	R	R	U	T	M	N	A	R
M	A	R	C	H	S	S	W	A	G	G	E	R
T	E	O	H	F	D	T	W	E	Y	T	N	B
B	N	L	S	E	W	O	V	C	J	K	I	O
C	P	L	O	D	N	M	I	O	P	S	E	R
B	E	E	S	T	D	P	F	T	E	A	T	L
H	E	A	F	L	O	U	N	C	E	I	O	N

What do you call a dinosaur with a very good vocabulary?

**A Thesaurus!**



Challenge – use the synonyms found to create sentences.

Can you edit and improve my sentence using a synonym for walk and said?

“Let’s go for another walk now,” said the T-rex, who was walking with the diplodocus.

“But my legs are tired. I don’t want to walk again,” said the diplodocus.

Next up is handwriting

Practise these words in your book, using the joins we have learnt.

document	done	double
doubt	doctor	down



Our final lesson is science.

Today, we are going to be revisiting magnetic forces.

I would like you to investigate items in your house and investigate if they are magnetic or not. Use a table to record your results, for example:

Household item	Is it magnetic? Yes or no
Spoon	Yes

If you do not have a magnet in your house, use a fridge magnet.

After this, I want you to write up your results and explain the types of materials that are magnetic and the materials that are not.

Great work today Class 3. Did you learn your poem yesterday too? Keep practising and keep an eye out for some questions to check!

Remember to complete your daily reading and enjoy some time outside.

Tonight, I am going to do an online Zumba class... you know how much I love dancing!

Have a super day!

Mrs Martin

## Maths answers

1a. False;  $20 \div 4 = 5$   
 2a. 3  
 3a. 6  
 4a.  $8 \div 4 = 2$

5a. False;  $40 \div 4 = 10$   
 6a. 6  
 7a. 12  
 8a.  $12 \div 4 = 3$

9a. True  
 10a. 8  
 11a. 7  
 12a.  $16 \div 4 = 4$

## English answers

### SYNONYM WORD SEARCH ANSWERS



This word search contains 13 synonyms for the boring word 'walk'. Can you find them all? You can use a thesaurus to help you search for any unfamiliar words.

T	R	A	I	P	S	E	I	O	T	R	F	M
Y	O	N	K	R	A	M	B	L	E	S	D	E
H	A	B	L	T	U	Z	Y	L	K	F	S	A
F	M	G	O	N	N	X	J	D	N	I	P	N
A	I	D	V	B	T	H	K	A	B	C	V	D
Q	T	S	C	V	E	U	P	R	A	N	C	E
U	Y	T	E	E	R	R	U	T	M	N	A	R
M	A	R	C	H	S	S	W	A	G	G	E	R
T	E	O	H	F	D	T	W	E	Y	T	N	B
B	N	L	S	E	W	O	V	C	J	K	I	O
C	P	L	O	D	N	M	I	O	P	S	E	R
B	E	E	S	T	D	P	F	T	E	A	T	L
H	E	A	F	L	O	U	N	C	E	I	O	N

What do you call a dinosaur with a very good vocabulary?

A Thesaurus!

