

Monday 22nd June 2020

Good morning Class !!

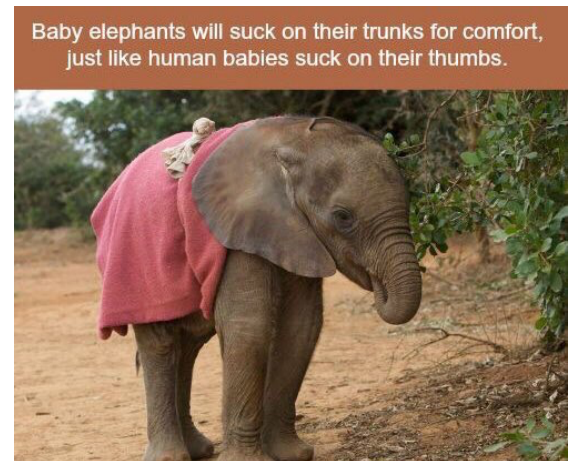
Did you have a good weekend? I did! I went to the Safari Park and saw lots of interesting animals. Islay loved them!



Today's fun facts:

Did you know these fun facts about African animals?

Miss Starrs loves facts about baby elephants.



Can you find an interesting fact about one of the animals below and send it me?



We are looking forward to seeing or hearing about what you do today.

Below, are some more fun and exciting activities for you to enjoy at home today.

Have a lovely day,

Mrs Potter and Miss Starrs

Warm up your bodies this morning with a Joe Wicks PE lesson.

<https://www.youtube.com/playlist?list=PLyCLOpd4VxBvTIWxbEMv3Hq5yQBgu8SDj>

Subject	Task:
<p>Literacy</p>	<p>Below are 2 pictures of African animals. Today, I would like you to write a sentence telling me which one you would rather be.</p> <p>You could even extend your sentence using the conjunction 'because' and adding some super adjectives.</p> <div data-bbox="505 510 826 828" data-label="Image"> </div> <div data-bbox="620 898 769 963" data-label="Caption"> <p>giraffe</p> </div> <div data-bbox="900 524 1286 810" data-label="Image"> </div> <div data-bbox="1061 887 1166 960" data-label="Caption"> <p>tiger</p> </div> <p>Here is Mr Price's answer:</p> <p>I would rather be a tiger because he is very fast and has big sharp teeth.</p> <p>If you find this a little tricky, choose your favourite, and label it. Like this:</p> <div data-bbox="277 1570 456 1628" data-label="Caption"> <p>sharp teeth</p> </div> <div data-bbox="477 1489 782 1718" data-label="Image"> </div> <div data-bbox="798 1570 943 1628" data-label="Caption"> <p>big paws</p> </div> <p>Fancy a challenge?</p> <p>Draw a picture of your favourite African animal, and tell me why it is your favourite.</p>


Numeracy

Today, we are going to practise adding equal groups... just like doubling!

Remember when you did that in reception? 😊

An equal group is a group of objects that have the same number.

For example:



Each vase has an equal number of flowers.

They each have 3.

We can write that as an addition sentence like this:

$$3 + 3$$

Then, we can count them all to find the answer.

$$3 + 3 = 6$$

Below, I have attached some pictures of equal groups. Could you write the addition number sentences to go with each one?

Look at this one to help you. 😊



$$2 + 2 + 2 = 6$$

Start on question 1, then do as many as you can.

If you finish them all, why not have a go at Miss Starrs' challenge.

Phonics

Here are some different phonics games to try. Choose a game you want to play for your phonics phase.

<https://www.topmarks.co.uk/english-games/5-7-years/letters-and-sounds>

Topic: Art

Last night, your Year 2 teacher called me. She was worried that she might not be able to meet you for a while. I thought it would be nice if you could draw a picture of yourself to send to send to her. This will help her to know who are.

Did you know, when we draw a picture of our self, we call it a self-portrait?

You must remember, to use the correct colours for your skin, hair and eyes. Like my picture.

If you wear glasses, like me, pop them on too.

















































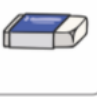



















Mrs Potter

Why not have a look at the self-portraits, of the teachers, on the school website to help you with your task.









<https://www.blowers.dudley.sch.uk/staff.htm>

Phonics: Phase 2-5 sounds

s 	a 	t 	p 	i 	n 	m 	d 
g 	o 	c 	k 	ck 	e 	u 	r 
h 	b 	f 	ff 	l 	ll 	ss 	

j 	v 	w 	x 	y 	z 	zz 	qu 	air 
ch 	sh 	th 	ng 	ai 	ee 	igh 	oa 	ure 
oo 	oo 	ar 	or 	ur 	ow 	oi 	ear 	er 
ay 	ou 	ie 	ea 	oy 	ir 	ue 	ue 	
aw 	wh 	ph 	ew 	ew 	oe 	au 	ey 	
a-e 	e-e* 	i-e 	o-e 	u-e 	u-e 			

*even


1	
2	
3	
4	
5	
6	
7	
8	


Miss Starrs' challenge:

Add Equal Groups

There are 2 groups of 4 cakes.

True or false?





Tick the right one.

☐ The total is 20.

☐ There are 3 groups of 5.

☐ $3 + 3 + 3$

Maths answers:

1	$2+2=4$
2	$3+3=6$
3	$2+2+2+2=8$
4	$3+3+3+3=12$
5	$5+5=10$
6	$3+3+3+3=12$
7	$5+5+5=15$
8	$10+10+10=30$

False – there are 4 groups of 2 cakes.

There are 3 groups of 5.

