




Hello Class 5!



Hope you are all well and staying safe.

As Thursday would usually be a singing assembly, today we are going to start off with a song.

Today you have a song to sing.

<https://www.youtube.com/watch?v=sxl6UX6piNE>

Our first lesson today is maths.

Today we are going to be subtracting from more than 4 digits.

Don't forget to use the column method to help you subtract.

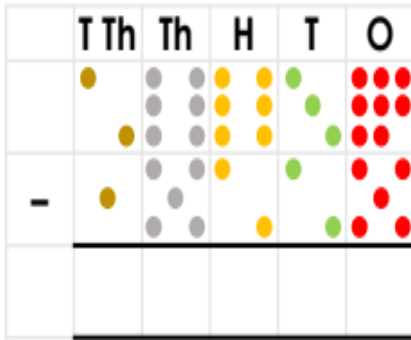
The following video gives you a quick reminder! 😊

https://www.youtube.com/watch?time_continue=2&v=Zsl3QgbUfoA&feature=emb_logo

13	$63,476 - 1,879 =$
Show your method	$\begin{array}{r} 63476 \\ - 1879 \\ \hline 61597 \end{array}$
	<input type="text"/>
	1 mark

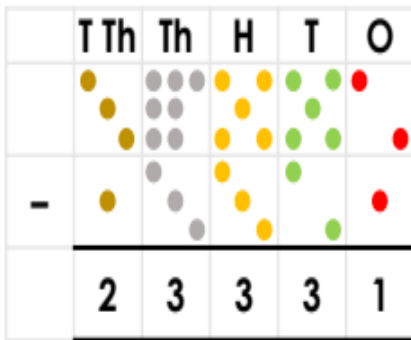
Choose your chilli challenge below.

1a. Calculate the missing answer.



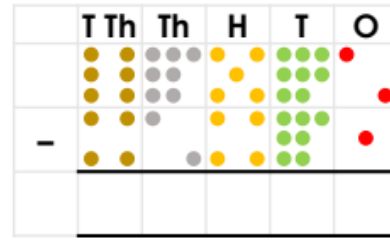
VF

2a. True or false?



VF

3a. Use <, > or = symbols to complete the subtraction.

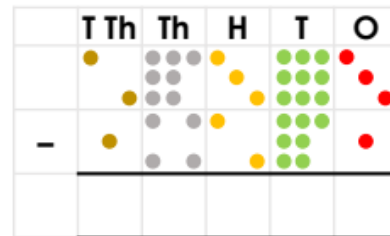


$$67,582 - 42,471 \quad \square \quad 25,112$$



VF

4a. Circle the correct answer for the subtraction.

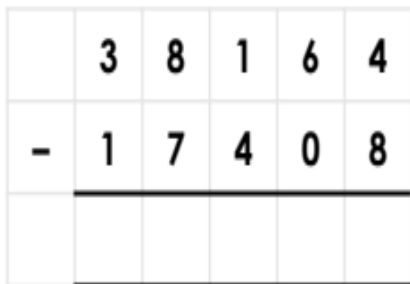


- A. 13,212 B. 13,124 C. 13,122



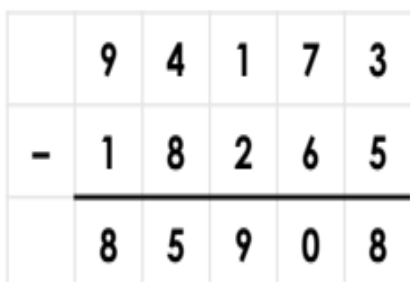
VF

5a. Calculate the missing answer.



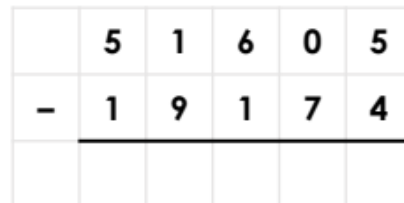
VF

6a. True or false?



VF

7a. Use <, > or = symbols to complete the subtraction.

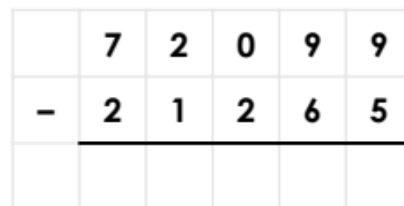


$$51,605 - 19,174 \quad \square \quad 32,431$$



VF

8a. Circle the correct answer for the subtraction.



- A. 50,835 B. 51,834 C. 50,834



VF

9a. Calculate the missing answer.

$$89,006 - 71,592 =$$



VF

10a. True or false?

9 ten thousands and 70 tens subtract fifty-nine thousand, 20 tens and 8 ones equals forty thousand, four hundred and ninety-two



VF

11a. Use $<$, $>$ or $=$ symbols to complete the subtraction.

7 ten thousands and 18 ones subtract forty-four thousand, 62 tens and 1 one equals...



$$70,018 - 44,621 \quad \square \quad 25,396$$

VF

12a. Circle the correct answer for the subtraction.

$$40,709 - 39,784 =$$

- A. 92 tens and 6 ones
- B. nine hundred and twenty-five ones
- C. nine hundred and twenty-five tens



VF

Rosie completes this subtraction incorrectly.

$$\begin{array}{r} 28701 \\ - 7621 \\ \hline 21180 \end{array}$$

Challenge -

Explain the mistake to Rosie and correct it for her.

Handwriting

In your exercise book, practise these joins.

apparent	appreciate	attached
available	average	awkward

Next is English.

This is one of my favourite pictures from the book *Gorilla* by Anthony Browne. You should remember this book as we have used in our English lessons.


I want you to study the picture below and answer the comprehension questions below. Remember to back up your answers with evidence.



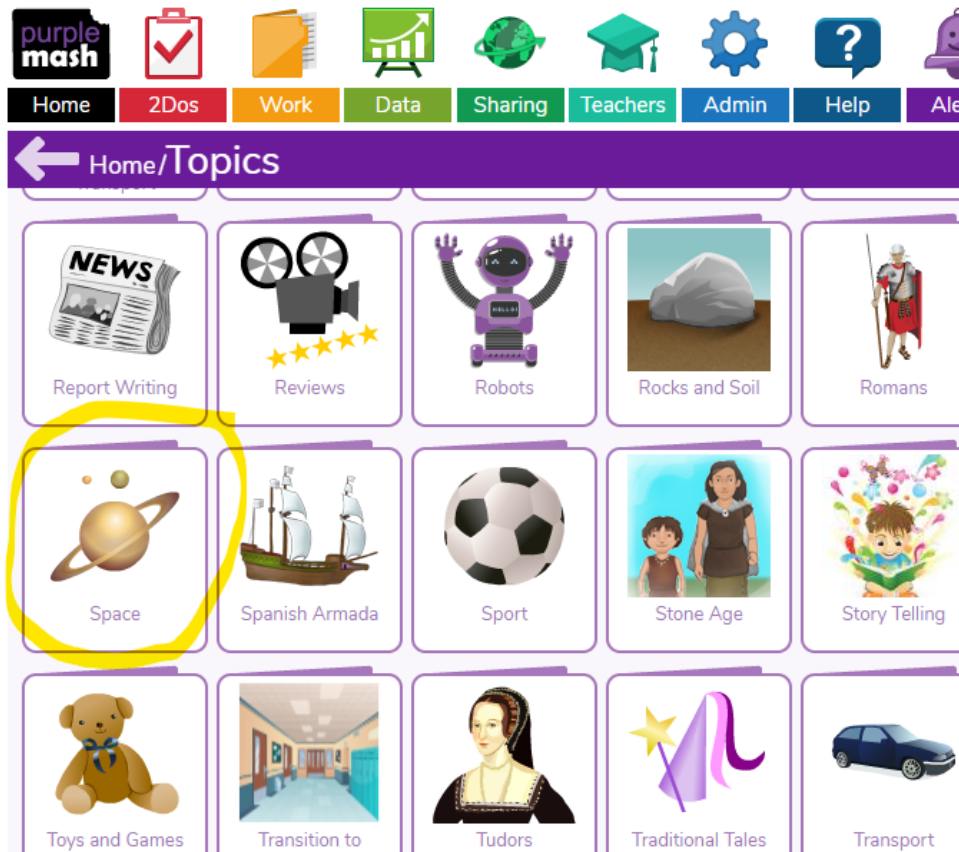
- What does the word ignored mean? Challenge - how many synonyms can you think of for the word ignored?
 - How many items are on the kitchen table?
- What sort of man do you think Hannah's father is? Why?
- Why has Anthony Browne chosen blue for the kitchen?

Our next lesson is ICT.

Log into purple mash and click onto the topics section.



Scroll down and find the space button.



Scroll down and find the activities section. Choose one activity you would like to try and complete it. You can choose all three if you have time. Let me know if you enjoyed it.

Don't forget, any problems, you can email me. Enjoy!

Maths answers

1a. 11,413	5a. 20,756	9a. 17,414
2a. False. The correct answer is 24,231.	6a. False. The correct answer is 75,908.	10a. False. The correct answer is 31,492.
3a. The answer is 25,111, so $67,582 - 42,471 < 25,112$.	7a. The answer is 32,431, so $51,605 - 19,174 = 32,431$.	11a. The answer is 25,397, so $70,018 - 44,621 > 25,396$.
4a. C. 13,122	8a. C. 50,834	12a. B. nine hundred and twenty-five ones

Challenge answer – Rosie did not write down the exchange she made when she exchanged 1 hundred for 10 tens. This means she still had 7 hundred subtract 6 hundreds when she should have 6 hundreds subtract 6 hundreds. The correct answer is 21,080.