

Hello Year 3!



Hope you are all ok? I've loved reading your messages and seeing your pictures so keep them coming. I really miss Class 3, so don't forget me!



Our first lesson today is P.E. I love to dance and I will be dancing with Oti this morning. I would love you all to join us.

<https://www.youtube.com/user/mosetsanagape>

The second lesson is maths. Today, we are going to be looking at multiplication.

The first thing I want you to do is count up from 0 in 2, 3, 5, 8 and 10

Can you recall all of them?




Next, we are going to recap multiplying 2 and 3 digit numbers by these.

	2	3	1
x			3
	6	9	3

Sometimes, you might have to carry a number

	3	5	1
x			8
2	8	0	8
	4		

Pick a chilli challenge for your work today.

$32 \times 2 =$ $43 \times 5 =$ $23 \times 3 =$ $61 \times 2 =$ $74 \times 2 =$		$72 \times 2 =$ $43 \times 5 =$ $23 \times 3 =$ $161 \times 3 =$ $149 \times 5 =$		$632 \times 2 =$ $343 \times 3 =$ $23 \times 8 =$ $261 \times 4 =$ $174 \times 8 =$	
---	---	---	---	---	---

Challenge...Mrs Martin has a problem. She has 192p in each jar. But she has 4 jars.

How much money does Mrs Martin have altogether? Can you convert to £ and p?

3 Dojos if you get it correct!

Our next lesson is English.

Today, we will be revisiting prepositions. **Prepositions** usually describe the position of something, the time when something happens and the way in which something is done,

### Prepositions for place

Expressing time, place and cause using prepositions.

Look at the picture and fill in the correct prepositions to describe the **places**.



The cat sleeps \_\_\_\_\_ the sheep.

There are fish \_\_\_\_\_ the pond.

A duck floats \_\_\_\_\_ the pond.

The dog is \_\_\_\_\_ his kennel.

A cow is jumping \_\_\_\_\_ the moon.

Some geese are flying \_\_\_\_\_ the sky.

The lunch bell will ring \_\_\_\_\_.

A horse is galloping \_\_\_\_\_ the woods.

A boy is climbing \_\_\_\_\_ a ladder.

The farm is \_\_\_\_\_ a stream.

**Challenge:** Make up three more sentences that use the prepositions

inside

under

near

to describe the picture.

The Final lesson is Geography.

Today is World Environmental Day. It's a day where you celebrate how to look after our Earth.

Watch this video to see how we can be 'sustainable'.

<https://www.bbc.co.uk/bitesize/topics/zshp34j/articles/z6m7vk7>

I want you to write 3 statements on how you are going to practise sustainability and how we can make our planet greener.



**Challenge – design a poster to display in school, that shows how we can look after our world. 10 Dojos for each entry and the winner will get a prize when we are back!**




I hope that you have a wonderful day my Year 3 stars! I am here if you need any help at all.

Remember to practise your challenges and go outside for some fresh air. When I have completed my work, I am going to read a little bit more of my new book, so make sure you do too!

Have a great day!

Mrs Martin 😊

## Maths Answers

$32 \times 2 = 64$		$73 \times 2 = 146$		$632 \times 2 = 1264$	
$43 \times 5 = 315$		$43 \times 5 = 215$		$343 \times 3 = 1029$	
$23 \times 3 = 69$		$33 \times 3 = 99$		$23 \times 8 = 184$	
$61 \times 2 = 122$		$161 \times 3 = 483$		$261 \times 4 = 1044$	
$74 \times 2 = 148$		$149 \times 5 = 745$		$174 \times 8 = 1392$	

## English answers

The cat sleeps **above** the sheep.

There are fish **in** the pond.

A duck floats **on** the pond.

The dog is **inside** his kennel.

A cow is jumping **over** the moon.

Some geese are flying **across** the sky.

The lunch bell will ring at **1 o'clock**.

A horse is galloping **towards** the woods.

A boy is climbing **up** a ladder.

The farm is **beside** a stream.

---