



Hello Class 5!

Happy Friday Eve! Hope you are all well. I love seeing your work so keep it coming!

As it's a Thursday, let's start our day with a sing song.

<https://safeYouTube.net/w/2sRM>

Our first lesson today is maths.

Complete your maths activity sheet below.

Section 1

I am a three-digit number. I am odd. The sum of my digits is 10. The tens digit is even. The ones digit is half the tens digit. I am more than 600.

What am I?

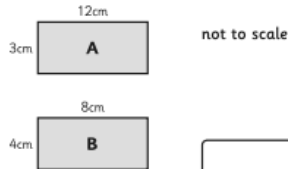
Section 2

Write the factor pairs of 36.

Write the common factors of 10 and 24.

Section 6

Which rectangle has the larger area?



Section 7

Draw an angle of 135°.

Section 3

Football cards come in packs of four cards. Three children buy 36 packs of cards. They share the cards equally. How many will they have each?

Section 4

Calculate:

$$4\frac{2}{3} \times 5 = \boxed{}$$

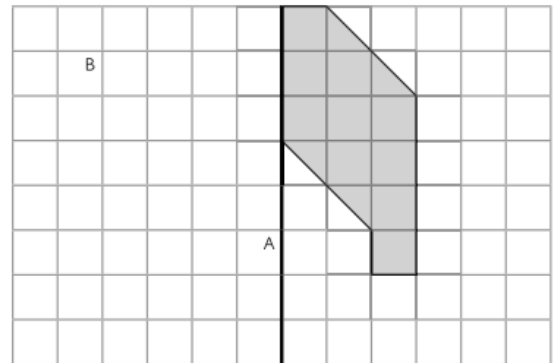
Section 5

Match the following:

$\frac{1}{5}$	50%
$\frac{1}{4}$	20%
$\frac{4}{5}$	25%
$\frac{1}{2}$	80%
$\frac{2}{5}$	40%

Section 8

Reflect this shape about the line AB.




Next is English.

Today we are going to continue reading the 'Our Big Kitchen' on serial mash.

Log-in to Purple Mash using the RM Unify tab on the Blowers Green website:

<https://www.blowers.dudley.sch.uk/links.htm>

Once you have arrived at the Home page, click: 'Serial Mash'



Then click on, 'Sapphires'



Next, click on the book called, 'Our Big Kitchen'.



Click on Chapter 3 and read through this chapter. After you have done this test your knowledge of the book by completing the online multiple choice. Then click on the 'What does home mean to you' app. The house Sienna lives in has never felt like home. Launch the app and explain what does home mean to you?

Chapter 3:



Our Big Kitchen

Chapter 3



What does home mean to you?



Biscuit Game - 2DIY3D



Chapter 3: SPaG



Open Ended Questions



Chapter 3: Multiple Choice



Reading

Let's continue reading with Mrs Ewin as she reads chapter 4 on the 'Brightstorm'.

<https://safeYouTube.net/w/WVQM>



Our final lesson is geography

Today I want you to use BBC bitesize to learn all about the Galapagos Islands including their location, environment, dramatic landscape and amazing wildlife.

I want you to:

- Watch the animation video introducing the Galapagos Islands.
 - Watch one short film showing the landscape and wildlife of the Islands.
- Complete two activities to build on your knowledge.

<https://www.bbc.co.uk/bitesize/articles/zgrdg7h>

Maths answers

Section 1

I am a three-digit number. I am odd. The sum of my digits is 10. The tens digit is even. The ones digit is half the tens digit. I am more than 600.

What am I?

721

Section 2

Write the factor pairs of 36.

1 x 36, 2 x 18, 3 x 12, 4 x 9, 6 x 6

Write the common factors of 10 and 24.

1, 2

Section 3

Football cards come in packs of four cards. Three children buy 36 packs of cards. They share the cards equally. How many will they have each?

48 cards

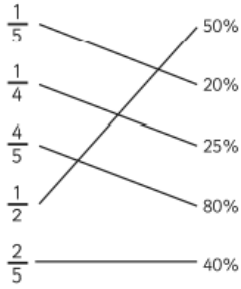
Section 4

Calculate:

$$4\frac{2}{3} \times 5 = 23\frac{1}{3}$$

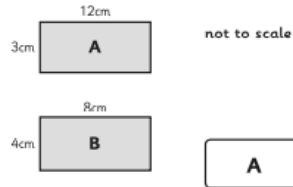
Section 5

Match the following:



Section 6

Which rectangle has the larger area?



Section 7

Draw an angle of 135°.



Section 8

Reflect this shape about the line AB.

