



Thursday 11<sup>th</sup> June

E-mail: [reception@blowers.dudley.sch.uk](mailto:reception@blowers.dudley.sch.uk)

Hello reception, I hope you are all well. I hope you are finding my snail jokes funny. If you have a snail joke, send it to me.



### Challenge time


Can you brush your teeth all by yourself?  
Send me a video and you will win **20 Dojo points.**



Let's getting moving today, it's time to work out with Andy. Andy visits the undergrowth to meet the tiny creatures we may often overlook. He moves like a monkey beetle, lifts like a leaf cutter and does martial arts with an orchid mantis. <https://safeYouTube.net/w/X56K>

### Reading

Can you click on this website and let me know which book you have read? Did you enjoy it? What happened in your book? Could you spot any tricky words? <https://home.oxfordowl.co.uk/>



### Funky Finger

Can you make a snail trail that goes across a piece of paper? This is mine, I then got Molly to trace it with her finger. Ask someone in your house to see if they can follow your trail. can they make a trail for you to follow?



### Phonics

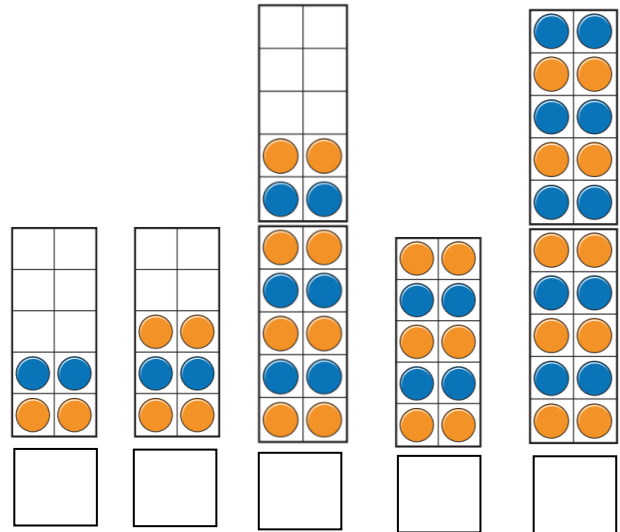
After watching this lesson can you write your own sentence. <https://safeYouTube.net/w/gO6K>

Today is the 'oo' sound. After watching this can you write down as many 'oo' words as you can? <https://safeYouTube.net/w/bQ6K>



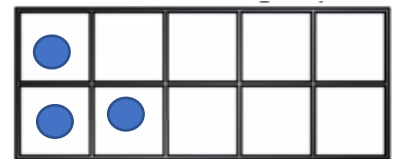
## Number

Can you remember how we were practising counting in 2s? Can you work out the total of these grids by counting in 2s'?




Today I am going to introduce you to the words **odd** and **even**. If a number is **even**, it can be shared out equally between 2. If it is **odd** there is always 1 left over. Our snail is going on a journey today. Follow him and meet some of his friends. Can you work out if the number of friends is odd or even?

If you need to work it out you could use a 10 frame.



or

You could even use plates and see if the number could share between 2 plates.



How many birds?  
Odd or even?



How many children?  
Odd or even?


How many sealions?

Odd or even?



How many crabs?

Odd or even?



## Art Challenge

Yesterday, we made a picture of a snail using paper like Henri Matisse.

Today's challenge I want you to make a snail using material from around the house. Using different materials will add different texture to your picture.

Send in your pictures and I will make a snail page where you are able to see all of your friends pictures. **20 Dojo points** for every picture.

These pictures are to give you ideas.

