

Good Morning Year 5.

I hope you are all well. I'm so proud of you keeping up with all your home learning! You are all doing wonderfully well.

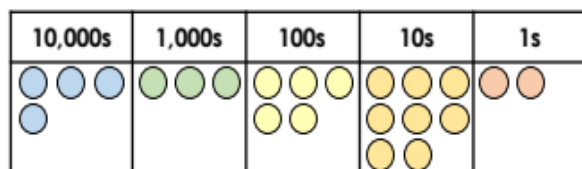
First, we have a maths lesson.

Today we are going to be revisiting addition. You may need to use a column method to help you solve the problems below.

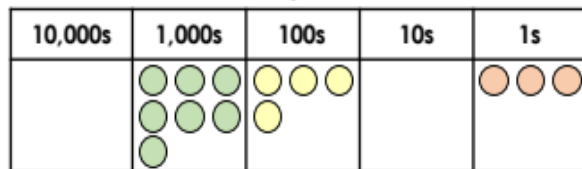
Please choose your chilli challenge below.

<p><b>1a. Use the place value counters to add the numbers below.</b></p> <table border="1"> <thead> <tr> <th>10,000s</th> <th>1,000s</th> <th>100s</th> <th>10s</th> <th>1s</th> </tr> </thead> <tbody> <tr> <td>●●</td> <td>●●●●</td> <td>●●●</td> <td>●●●●●</td> <td>●●</td> </tr> <tr> <td colspan="5" style="text-align: center;">+</td> </tr> <tr> <td>●</td> <td>●●</td> <td>●●●</td> <td>●●●●●</td> <td>●●●●●</td> </tr> </tbody> </table> <p>★ VF</p>	10,000s	1,000s	100s	10s	1s	●●	●●●●	●●●	●●●●●	●●	+					●	●●	●●●	●●●●●	●●●●●	<p><b>3a. Complete the bar models below.</b></p> <p><b>A.</b></p> <table border="1"> <tr> <td colspan="2">?</td> </tr> <tr> <td>7,363</td> <td>4,434</td> </tr> </table> <p><b>B.</b></p> <table border="1"> <tr> <td>6,136</td> <td>5,722</td> </tr> <tr> <td colspan="2">?</td> </tr> </table> <p>★ VF</p>	?		7,363	4,434	6,136	5,722	?																																																																									
10,000s	1,000s	100s	10s	1s																																																																																																	
●●	●●●●	●●●	●●●●●	●●																																																																																																	
+																																																																																																					
●	●●	●●●	●●●●●	●●●●●																																																																																																	
?																																																																																																					
7,363	4,434																																																																																																				
6,136	5,722																																																																																																				
?																																																																																																					
<p><b>2a. True or false?</b></p> <table border="1"> <thead> <tr> <th>10,000s</th> <th>1,000s</th> <th>100s</th> <th>10s</th> <th>1s</th> </tr> </thead> <tbody> <tr> <td>●●</td> <td>●●●●</td> <td>●●</td> <td>●●</td> <td>●●●●</td> </tr> <tr> <td>●●</td> <td>●●</td> <td></td> <td></td> <td>●●●●</td> </tr> <tr> <td colspan="5" style="text-align: center;">+</td> </tr> <tr> <td>●</td> <td>●●●●</td> <td>●</td> <td>●●●●</td> <td>●</td> </tr> <tr> <td colspan="5" style="text-align: center;">5      8      3      5      7</td> </tr> </tbody> </table> <p>★ VF</p>	10,000s	1,000s	100s	10s	1s	●●	●●●●	●●	●●	●●●●	●●	●●			●●●●	+					●	●●●●	●	●●●●	●	5      8      3      5      7					<p><b>4a. Solve the addition calculations below.</b></p> <p><b>i)</b></p> <table border="1"> <thead> <tr> <th>10,000s</th> <th>1,000s</th> <th>100s</th> <th>10s</th> <th>1s</th> </tr> </thead> <tbody> <tr> <td>●●</td> <td>●●</td> <td>●</td> <td>●</td> <td>●</td> </tr> <tr> <td>●</td> <td>●</td> <td></td> <td>●</td> <td></td> </tr> <tr> <td colspan="5" style="text-align: center;">+</td> </tr> <tr> <td>●●</td> <td>●</td> <td>●●</td> <td>●</td> <td>●●</td> </tr> <tr> <td>●</td> <td></td> <td>●</td> <td></td> <td>●●</td> </tr> <tr> <td colspan="5" style="text-align: center;">=</td> </tr> </tbody> </table> <p><b>ii)</b></p> <table border="1"> <thead> <tr> <th>10,000s</th> <th>1,000s</th> <th>100s</th> <th>10s</th> <th>1s</th> </tr> </thead> <tbody> <tr> <td>●●</td> <td>●</td> <td>●</td> <td>●</td> <td>●●</td> </tr> <tr> <td>●</td> <td>●</td> <td>●</td> <td></td> <td>●</td> </tr> <tr> <td colspan="5" style="text-align: center;">+</td> </tr> <tr> <td>●●</td> <td>●●</td> <td>●</td> <td>●●</td> <td>●</td> </tr> <tr> <td>●</td> <td>●●</td> <td></td> <td>●●</td> <td>●</td> </tr> <tr> <td colspan="5" style="text-align: center;">=</td> </tr> </tbody> </table> <p>★ VF</p>	10,000s	1,000s	100s	10s	1s	●●	●●	●	●	●	●	●		●		+					●●	●	●●	●	●●	●		●		●●	=					10,000s	1,000s	100s	10s	1s	●●	●	●	●	●●	●	●	●		●	+					●●	●●	●	●●	●	●	●●		●●	●	=				
10,000s	1,000s	100s	10s	1s																																																																																																	
●●	●●●●	●●	●●	●●●●																																																																																																	
●●	●●			●●●●																																																																																																	
+																																																																																																					
●	●●●●	●	●●●●	●																																																																																																	
5      8      3      5      7																																																																																																					
10,000s	1,000s	100s	10s	1s																																																																																																	
●●	●●	●	●	●																																																																																																	
●	●		●																																																																																																		
+																																																																																																					
●●	●	●●	●	●●																																																																																																	
●		●		●●																																																																																																	
=																																																																																																					
10,000s	1,000s	100s	10s	1s																																																																																																	
●●	●	●	●	●●																																																																																																	
●	●	●		●																																																																																																	
+																																																																																																					
●●	●●	●	●●	●																																																																																																	
●	●●		●●	●																																																																																																	
=																																																																																																					

5a. Use the place value counters to add the numbers below.



+



VF

6a. True or false?


	6	5	2	1	8
		2	7	0	3
+	3	0	1	9	2
	8	8	1	1	3
		1	1	1	




VF

7a. Complete the bar models below.

A.



B.



VF

8a. Solve the addition calculations below.

i)  $44,058 + 13,239 =$  \_\_\_\_\_

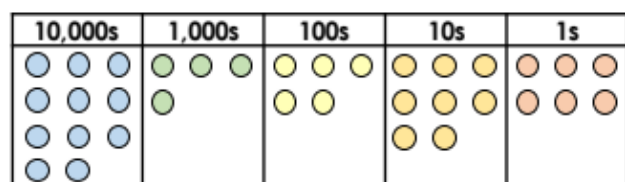
ii)

	5	9	0	6	1
		4	5	5	3
+		3	9	8	7

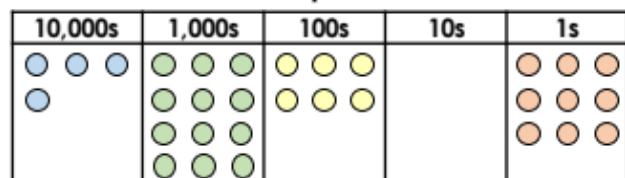


VF

9a. Use the place value counters to add the numbers below.



+



VF

10a. True or false?


$59,276 + 8,095 + 67,488 = 136,859$




VF

11a. Complete the bar models below.

A.



B.



VF

12a. Solve the addition calculations below.

i)  $8,008 + 41,299 =$  \_\_\_\_\_

ii)

	6	9	0	8	4
+		7	9	8	7



VF

Challenge – answer one of these problem-solving questions below.

1a. Gary and Jay are comparing their income.

	Earnings	Bonus
Gary	£17,429	£3,846
Jay	£18,283	£1,387



Gary

I earned more because altogether I earned above £20,000.

I must have had a larger income because my earnings were higher than yours.



Jay

Who is correct? Explain why.



R

5a. Add the missing place value counters to make this addition correct.

	10,000s	1,000s	100s	10s	1s
	●●		●●●●	●●●●	●
	●●●●	●●			●●
+	●		●●●●		●●●●
	7	2	1	8	6



PS

9a. Steve completes this sum incorrectly.

$$63,218 + 4,289 + 34,703 = 102,110$$

Explain the mistake he has made



R

Our next lesson is English.

As you all worked very hard using suffixes yesterday. Today we are going to be looking at prefixes. Prefixes are added to the beginning of a root word to change the meaning of the word.

## Verb prefixes

Verb prefixes (e.g. dis-, de-, mis-, over- and re-).

This word search contains the words in the boxes on the left but with the addition of prefixes. Find all the words and add the prefixes to the list. Watch out! There are also some words with incorrect prefixes.



pair	m	m	o	z	x	e	k	i	l	s	i	d	d	a	s
agree	m	u	p	r	k	k	u	s	a	f	b	e	i	b	t
approved	r	n	l	i	g	a	m	n	f	i	v	v	s	c	c
like	x	q	l	l	m	t	v	e	d	o	e	i	a	y	a
view	q	e	f	d	i	s	a	g	r	e	e	e	p	l	e
take	r	c	m	i	s	i	y	p	s	h	r	w	p	g	r
take	v	u	b	s	w	d	p	f	n	r	g	l	r	e	n
trust	c	f	m	t	i	a	o	e	e	m	a	d	o	k	u
wind	l	f	i	r	n	o	k	v	g	q	e	e	v	a	h
load	p	u	s	u	d	l	o	v	l	f	r	s	e	t	d
react	b	g	t	s	u	r	t	s	i	m	u	p	d	r	m
approved	l	r	a	t	w	e	i	v	e	r	p	a	v	e	n
	b	a	k	t	k	v	r	i	a	p	s	i	d	v	y
	b	v	e	q	v	o	d	n	i	w	e	r	r	o	k
	y	a	a	t	b	n	f	i	b	k	c	k	v	k	j

Rewrite the following sentences, adding prefixes to the verbs to change the meaning.

George was \_\_\_behaving again. He couldn't stop \_\_\_agreeing with everything that his teacher suggested. She \_\_\_approved of his \_\_\_obedience and his \_\_\_reaction to her constructive criticism.

He was sent to the head teacher to have the opportunity to \_\_\_view the way he \_\_\_acted. He was very \_\_\_respectful and made the head teacher feel very \_\_\_comfortable. His mother would definitely \_\_\_like his latest behaviour.

Our final lesson is science.

Last week I set you a task to create an article on about the rocket launch of Space X. So, I would like to revisit the work we did during our topic 'Earth and Space' today.

Firstly, I would like you to draw a diagram of the solar system. Draw the diagram from left the right. The sun should be on the far left.

Label your diagram with all the planets, the sun, the asteroid belt and comets.

Then I would like you to investigate the similarities and differences between the eight planets.

Use this website to support your learning.

<https://www.youtube.com/watch?v=Qd6nLM2QIWw>

The following diagram will also help:




### Maths answers

1a. $26,472 + 12,484 = 38,956$	5a. $43,582 + 7,403 = 50,985$	9a. $114,586 + 52,609 = 167,195$
2a. True	6a. False as $65,218 + 2,703 + 30,192 = 98,113$ .	10a. False as $59,276 + 8,095 + 67,488 = 134,859$ .
3a. A = 11,797 B = 11,858	7a. A = 57,035 B = 112,456	11a. A = 103,012 B = 65,487
4a. i) 64,435 ii) 76,355	8a. i) 57,297 ii) 67,601	12a. i) 49,307 ii) 77,071

### Maths problem solving answers

1a. Gary is correct because his total income was £21,275 which is greater than £20,000. Jay's income was £19,670.

5a. Various answers, for example:



9a. Steve's answer should be 102,210. He has added the digits in the hundreds column up incorrectly.

## English answers

5c

Correct word list	Incorrect words that can be found
despair	dispair
disagree	reagree
disapproved	
dislike	relike
preview	deviue
overtake	distake
mistake	
mistrust	
rewind	miswind
overload	underload
overreact	unreact
unapproved	

George was **misbehaving** again. He couldn't stop **disagreeing** with everything that his teacher suggested. She **disapproved** of his **disobedience** and his **overreaction** to her constructive criticism.

He was sent to the head teacher to have the opportunity to **review** the way he **reacted**. He was very **disrespectful** and made the head teacher feel very **uncomfortable**. His mother would definitely **dislike** his latest behaviour.

---